

Question 1

Answer the following questions about TRADE.

- a) Define the term *trade*. (1)
- b) What is the difference between importing and exporting? ($\frac{1}{2} \times 2 = 1$)
- c) Give 2 examples of primary products. ($\frac{1}{2} \times 2 = 1$)
- d) Give 2 examples of secondary products. ($\frac{1}{2} \times 2 = 1$)
- e) Give a reason why South Africa exports. (1)
- f) Look at the following items South Africa imports and exports.

Gold	Factory Machines	Oil	Fruit
Iron	Medicines	Electrical Goods	Car Parts

Copy the table below with the correct headings.
Fill in the above items under the correct heading.

IMPORTED ITEMS	EXPORTED ITEMS

($\frac{1}{2} \times 8 = 4$)

[9]

Question 2

Answer the following questions about atlases and global statistics.

- a) What does a Physical map show? (1)
- b) What does a political map show? (1)
- c) Name the longest River in the world. (1)
- d) Name the largest desert in the world. (1)
- e) Name the biggest country in the world. (1)

[5]

Question 3

Match the unscrambled words in column A to their correct definition in column B. Unscramble the words and write the matching definition.

COLUMN A	COLUMN B
3.1 chxengea	A. Things that people buy and sell
3.2 dosog	B. Someone who makes things out of wood
3.3 pows	C. To give something and receive something in return
3.4 btraer	D. To exchange one thing for another thing
3.5 craneptr	E. A way of swopping goods of equal value
3.6 msiucnia	F. Something you do for other people
3.7 svreisc	G. Someone who plays a musical instrument

[7]

Question 4

TRUE or FALSE? State whether the following statements about fair and unfair trade are true or false. Write only TRUE or FALSE.





- a) Trade is unfair when the buyers of raw materials decide on the price and not the sellers of these materials.
- b) Trade is fair when getting low prices for raw materials keep some countries poor.
- c) Trade is unfair when countries cannot afford to buy machines to help process their own raw materials.
- d) Exploitation is an example of fair trade.
- e) Low wages and long working hours are examples of unfair trade.
- f) When workers do not develop their skills, trade is fair.
- g) When working conditions are safe and healthy, trade is fair.

($\frac{1}{2} \times 6 = 3$)

[3]

Question 5

Look at the table below. Match the words in column B to the correct picture in column A.

COLUMN A	COLUMN B
a) 	Mixing and melting
b) 	Selling
c) 	Transporting
d) 	Raw Cocoa

(4 x 1/2 = 2)

Question 6

Answer the following questions on gold in South Africa.

- a) Is South Africa the second largest producer of gold? (1)
- b) What is the weight of gold measured in? (1)
- c) What does 24 carats mean? (1)
- d) Mining South African gold for jewellery involves 2 stages.
Stage 1 includes: mining; crushing; separating; smelting; pouring; and exporting.
Stage 2 includes: transporting; manufacturing; _____ and _____. (2)

[5]

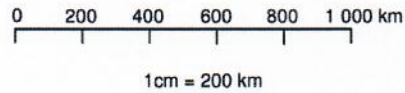
Question 7

Answer the following questions about scales.

a) Draw a line scale for this word scale:

1cm on the map = 500km on the ground. (1)

b) Write the line scale in the figure below as a word scale. (1)



c) Look at the map below and use the scale from 7b).

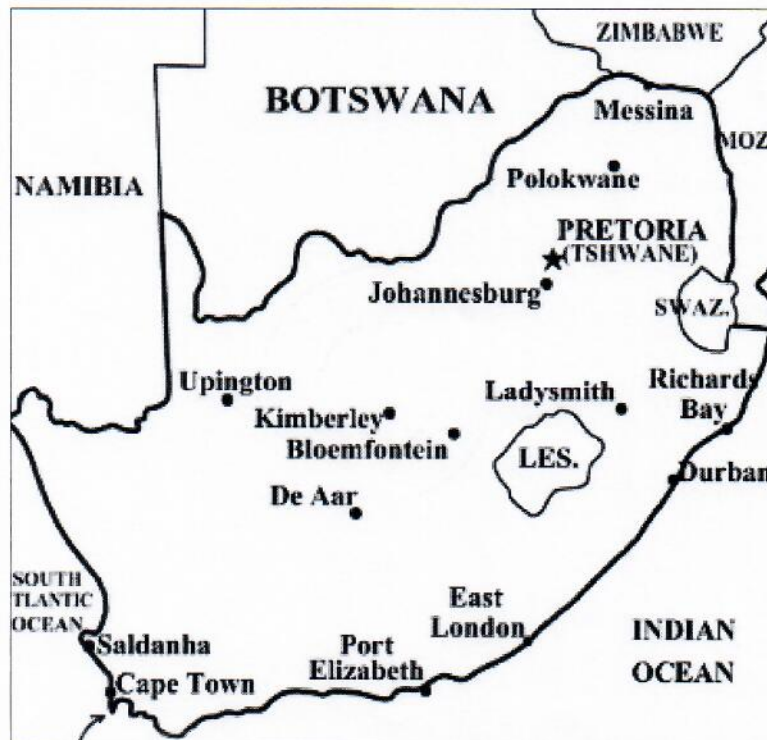
Using your ruler, measure and calculate the distance on the ground (round off to the nearest cm) from the following places:

i. Johannesburg to Durban. (2)

ii. Polokwane to Port Elizabeth (2)

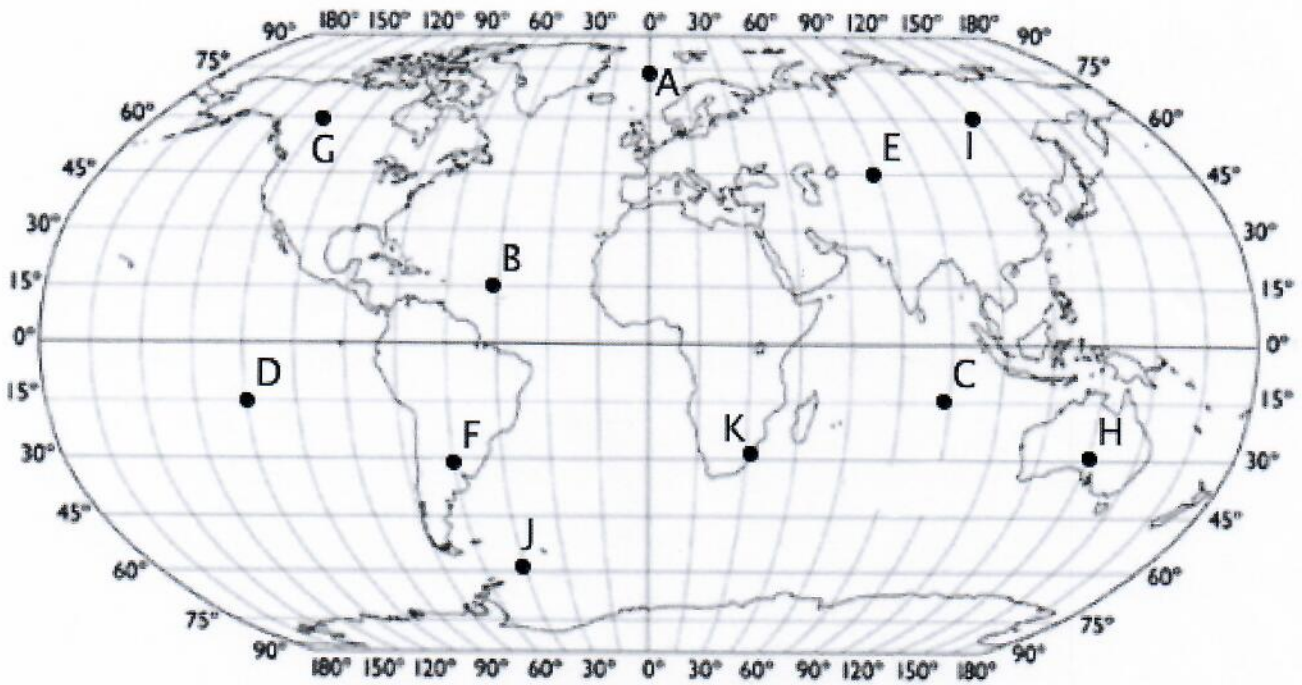
[6]

Figure 1



Question 8

Look at the map of the world below.



Give co-ordinates for the following letters on the map:

- a) B (1)
 - b) F (1)
 - c) A (1)
- [3]

TOTAL: 40